
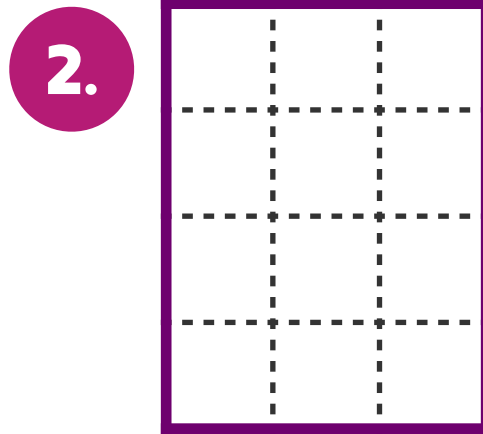


Rows and Columns in Partitioned Rectangles #1

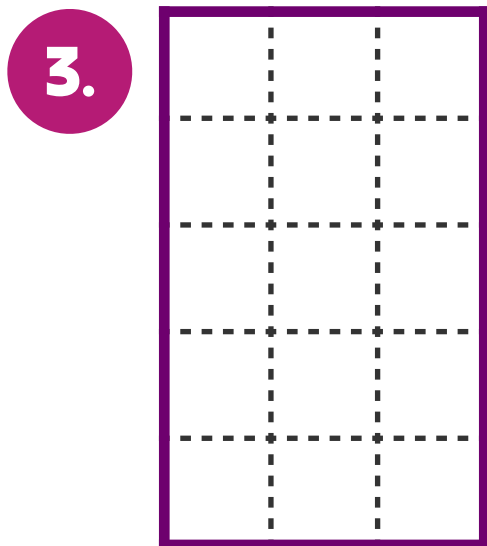
Each rectangle below is made up of squares. Trace the squares in each rectangle. Then write the number of rows, columns, and total squares.



Number of rows: _____
Number of columns: _____
Total: _____ squares



Number of rows: _____
Number of columns: _____
Total: _____ squares



Number of rows: _____
Number of columns: _____
Total: _____ squares



Number of rows: _____
Number of columns: _____
Total: _____ squares