

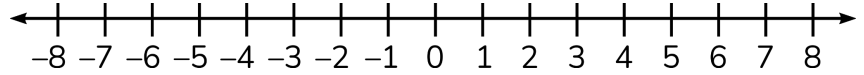
Add Integers Using Number Lines #1



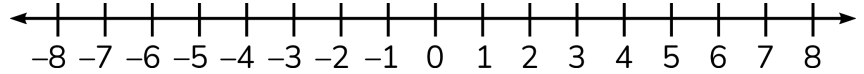
Use the number lines to add.



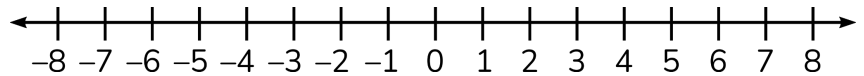
1. $-8 + 1 =$ _____



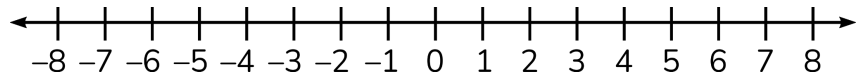
2. $-2 + (-1) =$ _____



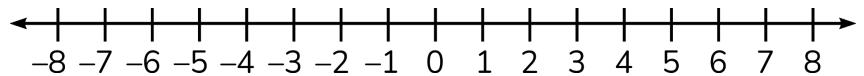
3. $6 + (-4) =$ _____



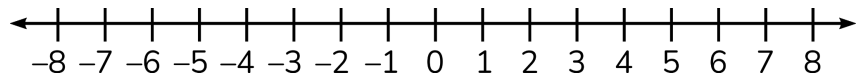
4. $-5 + 5 =$ _____



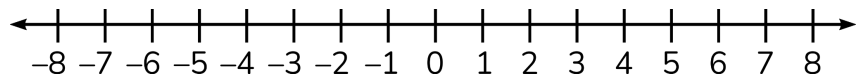
5. $0 + (-2) =$ _____



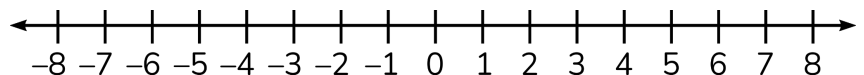
6. $8 + (-12) =$ _____



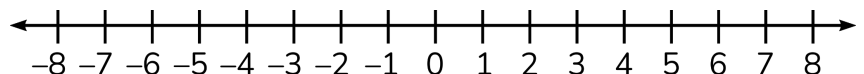
7. $-3 + (-3) =$ _____



8. $-7 + 13 =$ _____



9. $-6 + 11 =$ _____



10. $7 + (-15) =$ _____

