


# Match Fractions and Models: Parts of a Group #1

Draw a line from each fraction to the model that shows the fraction shaded.


$$\frac{1}{3}$$



$$\frac{3}{4}$$




$$\frac{1}{6}$$



$$\frac{2}{8}$$



$$\frac{4}{6}$$



$$\frac{5}{8}$$

