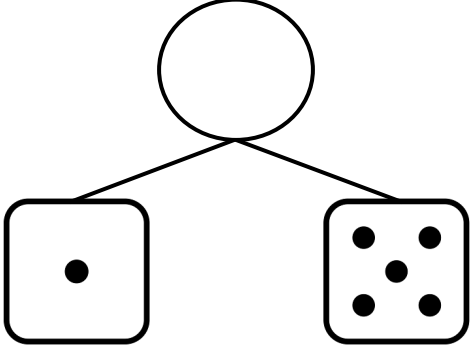
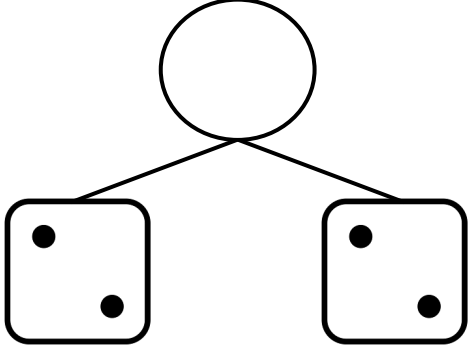
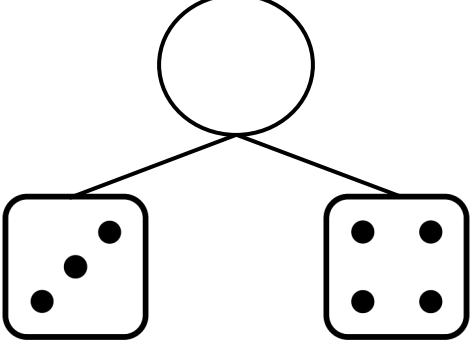
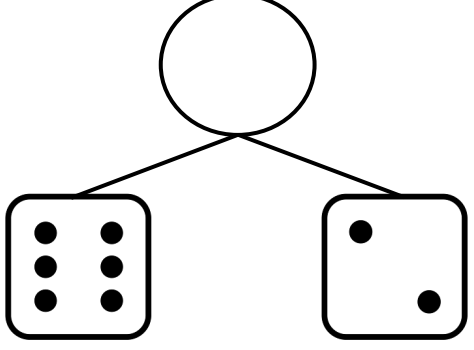
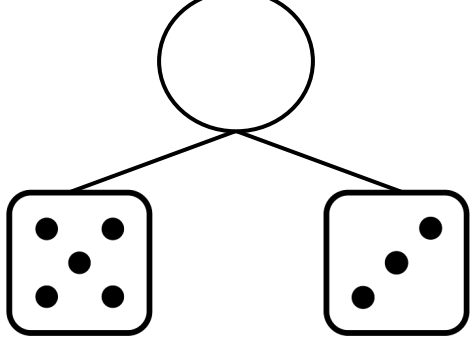
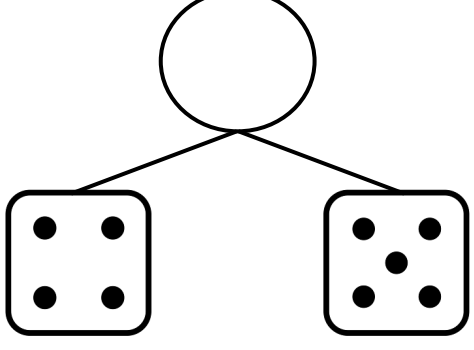


Number Bonds: Roll the Dice

Add the numbers on the dice. Write the sum in the circle. Then, write an equation to match the number bond.

<p>1</p>  <p>_____ + _____ = _____</p>	<p>2</p>  <p>_____ + _____ = _____</p>
<p>3</p>  <p>_____ + _____ = _____</p>	<p>4</p>  <p>_____ + _____ = _____</p>
<p>5</p>  <p>_____ + _____ = _____</p>	<p>6</p>  <p>_____ + _____ = _____</p>